


Year 1
Plants Test 3 (end of topic)

Name: _____ Class: _____ Date: _____

1. a) Label the tree.

fruit

branch



leaf


root

trunk

KU

2 marks

b) Here is the same tree.



The leaves have fallen off. Why?

.....

KU

1 mark

c) What happens to the leaves before they fall off the tree?

.....

.....

KU

1 mark

Total for
this page

2. Write down the name of a tree.

.....

KU

1 mark

3. Plants grow.




day 1



day 2

day 3



day 4

a) Look at the table. Draw the plant on day 3.

b) Fill in the gaps in this table.

Day	Number of leaves	Number of roots
1	2	2
2	2	
3	2	5
4		6

c) What has happened to the stem on day 3?

.....

AWS

2 marks

AWS

2 marks

A

1 mark

/10

Total for this test